



INDIAN SCHOOL AL WADI AL KABIR  
DEPARTMENT OF MATHEMATICS (2023- 2024)

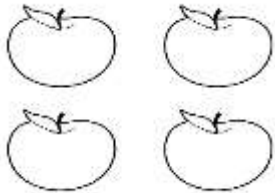
TOPIC: ADDITION

WORKSHEET - 1

RESOURCE PERSON: Ms. Tresa Kumar

NAME: \_\_\_\_\_ CLASS: I SEC: \_\_\_\_\_ DATE: \_\_\_\_\_

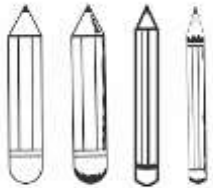
a) Sam has 6 apples and John has 3 apples. How many apples do they both have together?



T	O
	6
	3

Ans \_\_\_\_\_ apples.

b) Anu sold 10 red pencils and 12 blue pencils in a shop. What is the total number of pencils sold by Anu?



T	O
1	0
1	2

Ans \_\_\_\_\_ pencils.

CHECKED BY: ACADEMIC COORDINATOR – CLASS -I  
ISWK/DEPARTMENT OF MATHEMATICS /2023-2024


c) There are 43 tall trees and 23 short trees in a park. How many trees are there altogether?



T	O
4	3
2	3

Ans \_\_\_\_\_ trees.

d) Elsa got 10 candies from her friends and 17 candies more from her brother. How many candies did she get in all?



T	O
1	0
1	7

Ans \_\_\_\_\_ candies.

CHECKED BY: ACADEMIC COORDINATOR – CLASS -I  
ISWK/DEPARTMENT OF MATHEMATICS /2023-2024

